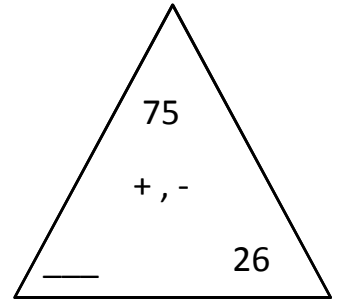
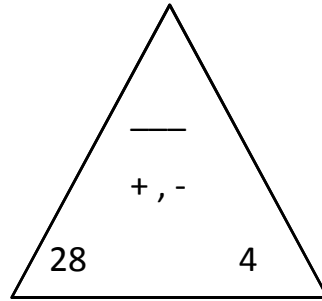
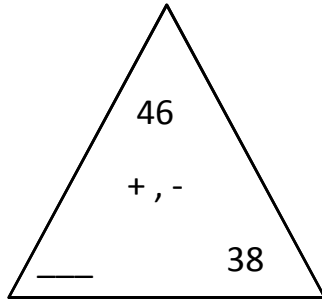
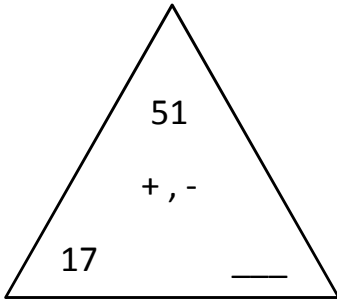


Name: _____ Date: _____ Score: _____

+ , - Fact Triangles - fill in the missing number

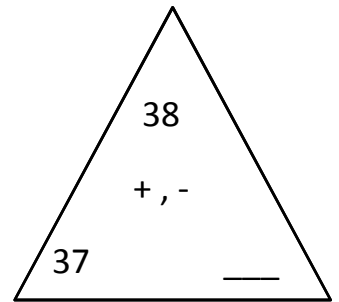
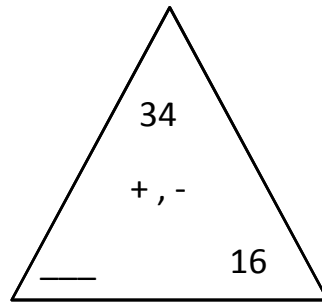
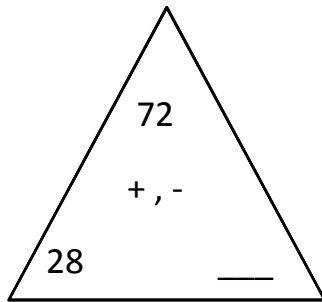
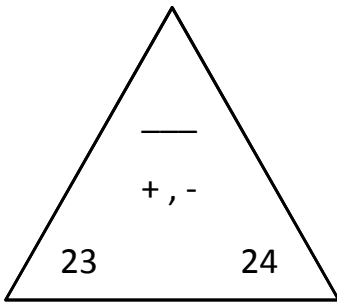


17 + 34 = 51

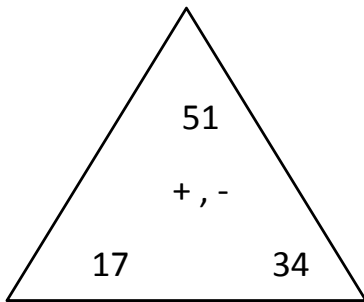
34 + 17 = 51

51 - 17 = 34

51 - 34 = 17



Answers

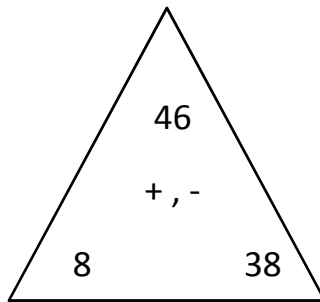


$$\underline{17 + 34 = 51}$$

$$\underline{34 + 17 = 51}$$

$$\underline{51 - 17 = 34}$$

$$\underline{51 - 34 = 17}$$

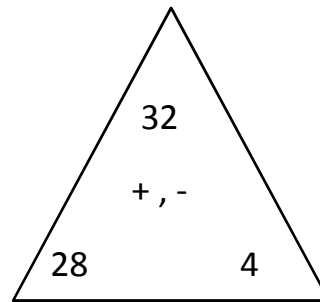


$$\underline{8 + 38 = 46}$$

$$\underline{38 + 8 = 46}$$

$$\underline{46 - 8 = 38}$$

$$\underline{46 - 38 = 8}$$

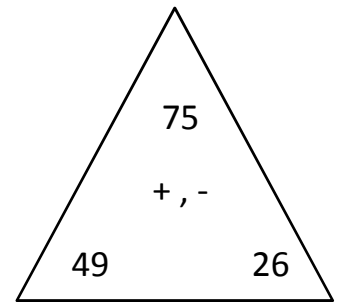


$$\underline{28 + 4 = 32}$$

$$\underline{4 + 28 = 32}$$

$$\underline{32 - 28 = 4}$$

$$\underline{32 - 4 = 28}$$

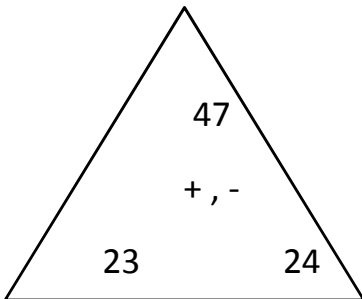


$$\underline{49 + 26 = 75}$$

$$\underline{26 + 49 = 75}$$

$$\underline{75 - 49 = 26}$$

$$\underline{75 - 26 = 49}$$

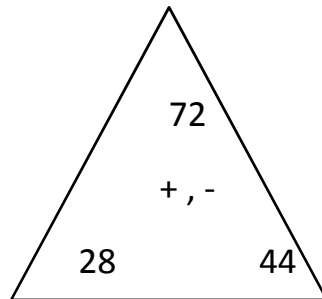


$$\underline{23 + 24 = 47}$$

$$\underline{24 + 23 = 47}$$

$$\underline{47 - 23 = 24}$$

$$\underline{47 - 24 = 23}$$

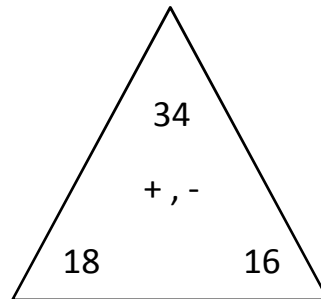


$$\underline{28 + 44 = 72}$$

$$\underline{44 + 28 = 72}$$

$$\underline{72 - 28 = 44}$$

$$\underline{72 - 44 = 28}$$

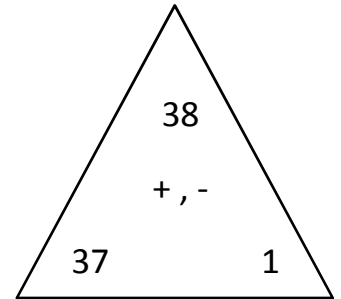


$$\underline{18 + 16 = 34}$$

$$\underline{16 + 18 = 34}$$

$$\underline{34 - 18 = 16}$$

$$\underline{34 - 16 = 18}$$



$$\underline{37 + 1 = 38}$$

$$\underline{1 + 37 = 38}$$

$$\underline{38 - 37 = 1}$$

$$\underline{38 - 1 = 37}$$