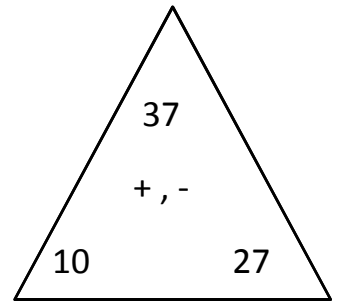
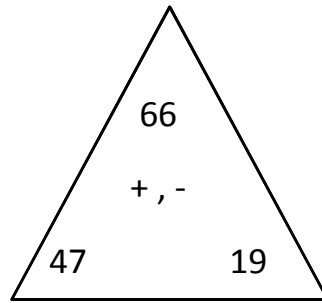
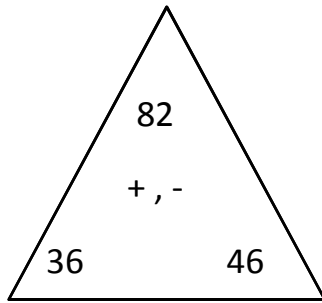
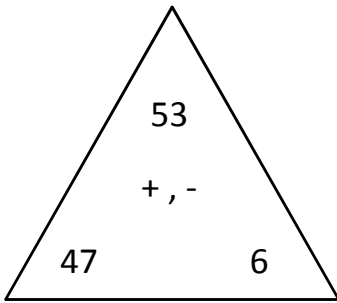


Name: \_\_\_\_\_ Date: \_\_\_\_\_ Score: \_\_\_\_\_

### + , - Fact Triangles



47 + 6 = 53

6 + 47 = 53

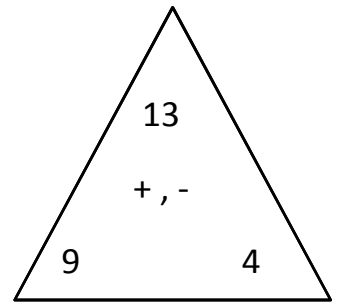
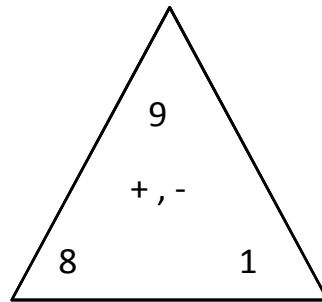
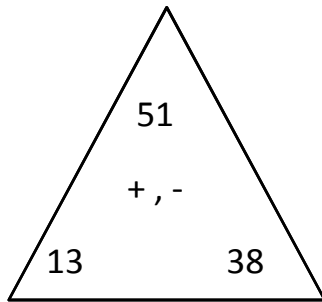
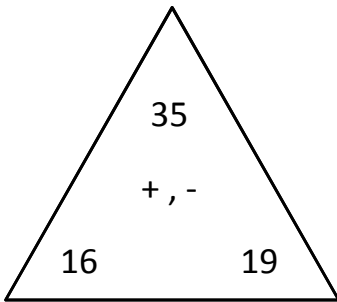
53 - 47 = 6

53 - 6 = 47

\_\_\_\_\_  
\_\_\_\_\_  
\_\_\_\_\_

\_\_\_\_\_  
\_\_\_\_\_  
\_\_\_\_\_

\_\_\_\_\_  
\_\_\_\_\_  
\_\_\_\_\_



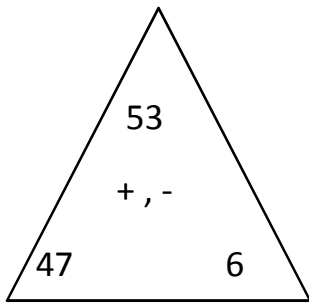
\_\_\_\_\_  
\_\_\_\_\_  
\_\_\_\_\_  
\_\_\_\_\_

\_\_\_\_\_  
\_\_\_\_\_  
\_\_\_\_\_  
\_\_\_\_\_

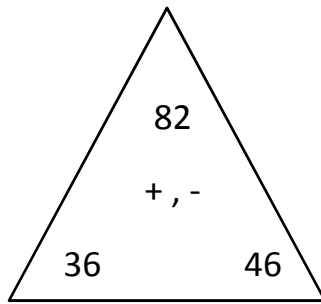
\_\_\_\_\_  
\_\_\_\_\_  
\_\_\_\_\_  
\_\_\_\_\_

\_\_\_\_\_  
\_\_\_\_\_  
\_\_\_\_\_  
\_\_\_\_\_

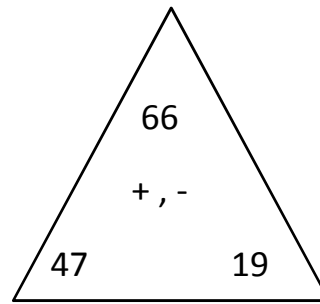
## Answers



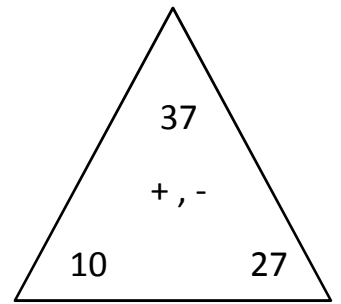
$$\begin{array}{r} 47 + 6 = 53 \\ \hline 6 + 47 = 53 \\ \hline 53 - 47 = 6 \\ \hline 53 - 6 = 47 \\ \hline \end{array}$$



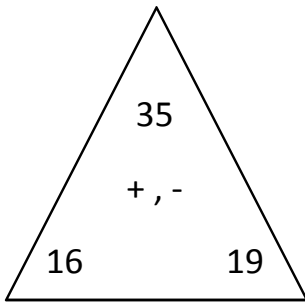
$$\begin{array}{r} 36 + 46 = 82 \\ \hline 46 + 36 = 82 \\ \hline 82 - 36 = 46 \\ \hline 82 - 46 = 36 \\ \hline \end{array}$$



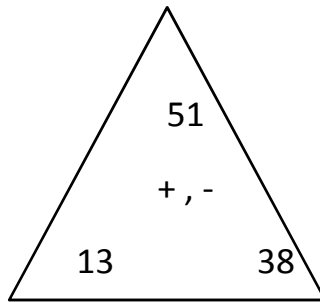
$$\begin{array}{r} 47 + 19 = 66 \\ \hline 19 + 47 = 66 \\ \hline 66 - 47 = 19 \\ \hline 66 - 19 = 47 \\ \hline \end{array}$$



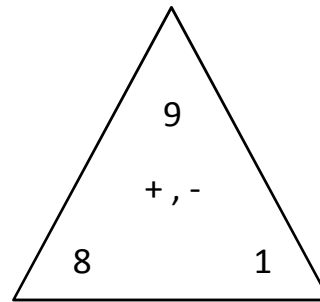
$$\begin{array}{r} 10 + 27 = 37 \\ \hline 27 + 10 = 37 \\ \hline 37 - 10 = 27 \\ \hline 37 - 27 = 10 \\ \hline \end{array}$$



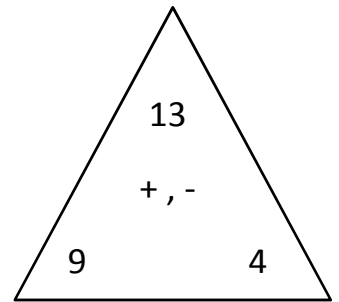
$$\begin{array}{r} 16 + 19 = 35 \\ \hline 19 + 16 = 35 \\ \hline 35 - 16 = 19 \\ \hline 35 - 19 = 16 \\ \hline \end{array}$$



$$\begin{array}{r} 13 + 38 = 51 \\ \hline 38 + 13 = 51 \\ \hline 51 - 13 = 38 \\ \hline 51 - 38 = 13 \\ \hline \end{array}$$



$$\begin{array}{r} 8 + 1 = 9 \\ \hline 1 + 8 = 9 \\ \hline 9 - 8 = 1 \\ \hline 9 - 1 = 8 \\ \hline \end{array}$$



$$\begin{array}{r} 9 + 4 = 13 \\ \hline 4 + 9 = 13 \\ \hline 13 - 9 = 4 \\ \hline 13 - 4 = 9 \\ \hline \end{array}$$